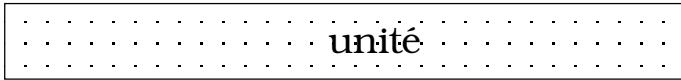
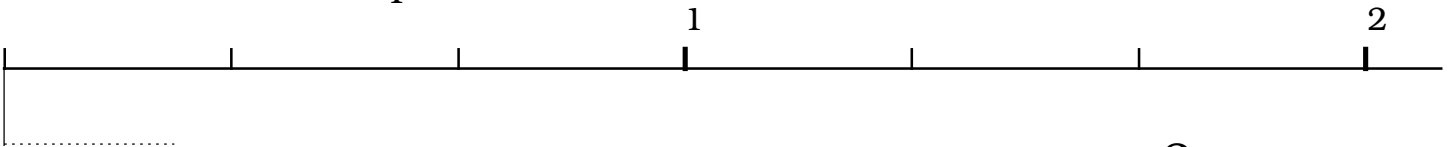


9. Comparaisons de fractions

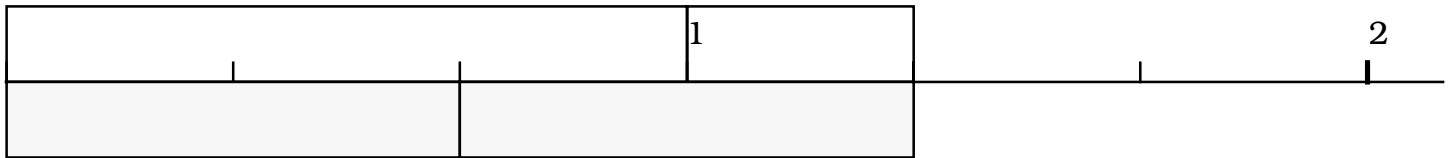
On utilise maintenant les bandes-unités et le réseau de l'annexe 2.



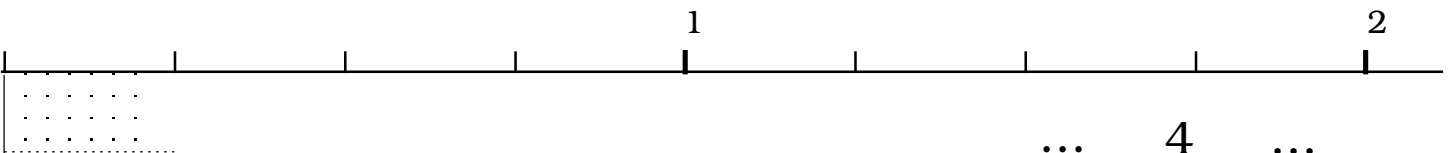
Construire une bande $\frac{3}{4}$



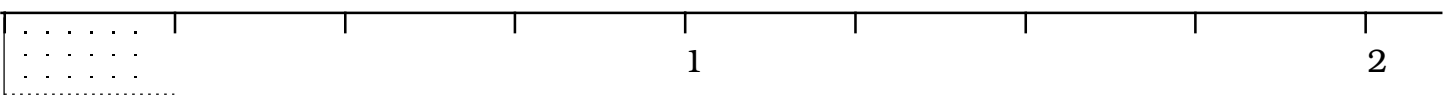
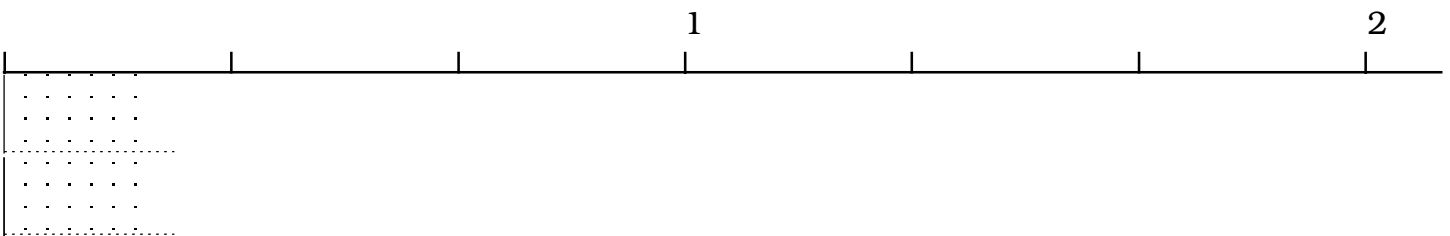
Coller la bande et compléter $\frac{\dots}{3} < \frac{3}{4} < \frac{\dots}{3}$



Construire et coller les bandes correspondantes. Compléter $1 + \frac{1}{3} = \frac{\dots}{3} + \frac{\dots}{3} = \frac{\dots}{\dots}$



Coller les bandes et compléter $\frac{\dots}{4} < \frac{4}{3} < \frac{\dots}{4}$



Coller les bandes et comparer les fractions

$$\frac{3}{2} \quad \frac{5}{3} \quad \frac{4}{3} \quad \frac{8}{5}$$

$— < — < — < —$